

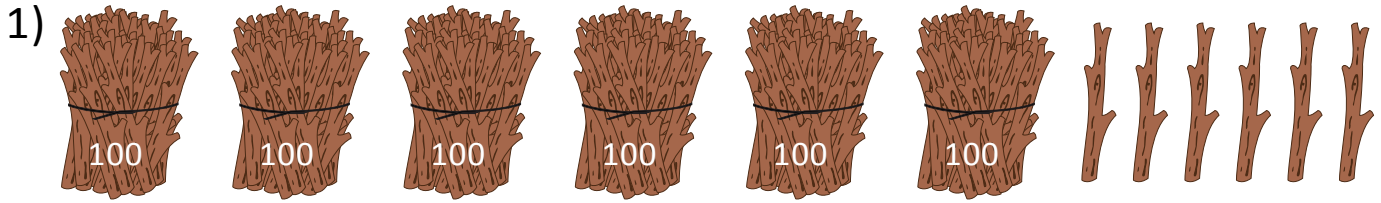


NAME _____

DATE _____

BUNDLE AND COUNT

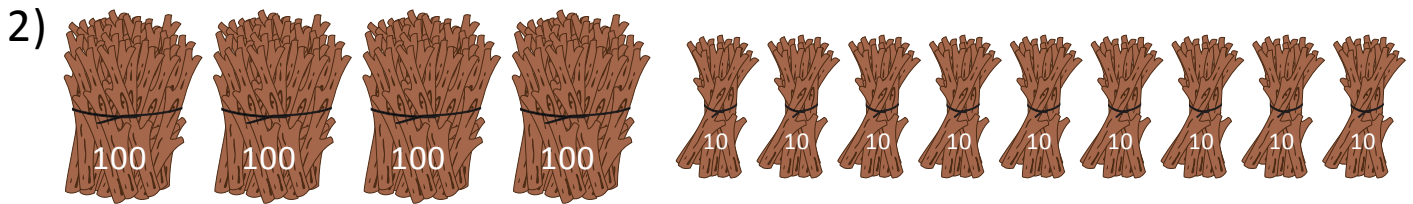
These are bundles of hundreds, tens and ones. Write the numeral, expanded form and number name for each number shown.



(a) Numeral = ____.

(b) Expanded form = ____ + ____.

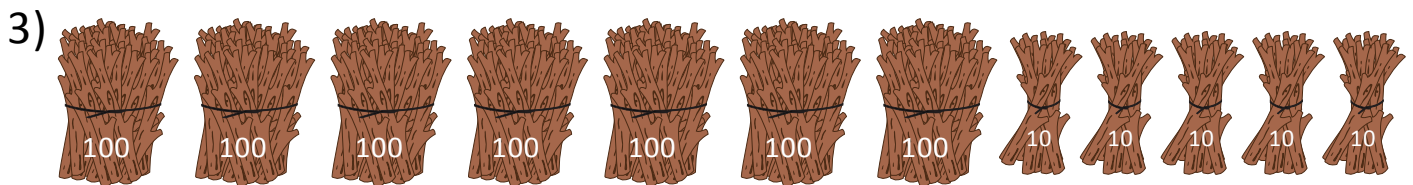
(c) Number name = _____ + _____.



(a) Numeral = ____.

(b) Expanded form = ____ + ____.

(c) Number name = _____ + _____.



(a) Numeral = ____.

(b) Expanded form = ____ + ____.

(c) Number name = _____ + _____.